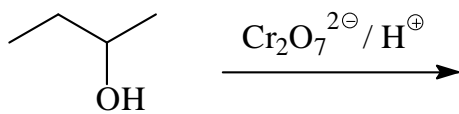
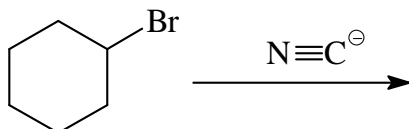
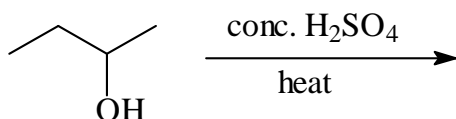


Marks
5

- Give the name of the starting material where indicated and the constitutional formula of the major organic product formed in each of the following reactions.

**Name:****Name:**