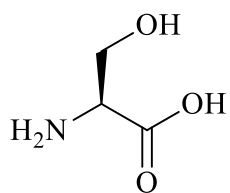
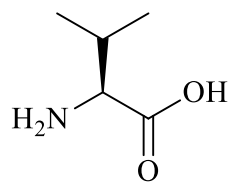


Marks
3

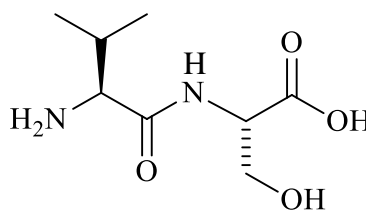
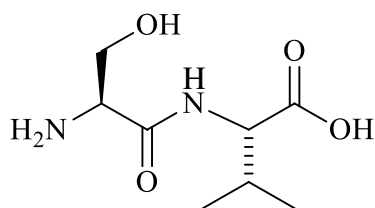
- The amino acids serine and valine can be reacted together to form 2 dipeptides. Draw the structures of the 2 possible dipeptides.



serine



valine

**THE REMAINDER OF THIS PAGE IS FOR ROUGH WORKING ONLY.**