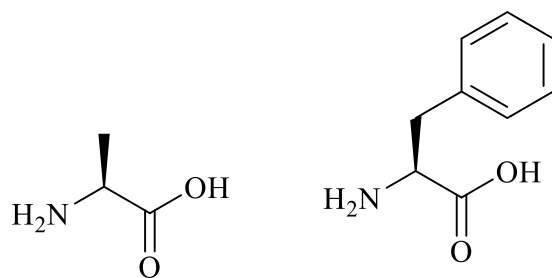
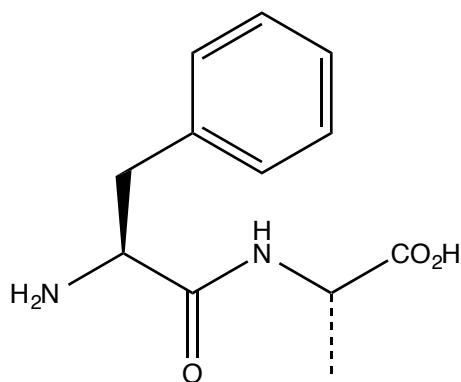
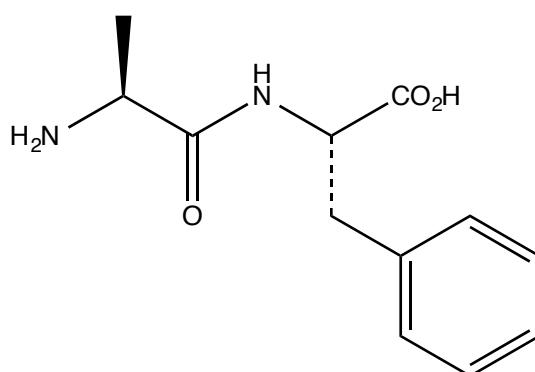


- The amino acids alanine and phenylalanine can be reacted together to form two dipeptides. Draw the structures of the two possible dipeptides.

**Marks**  
**3**

alanine

phenylalanine

**THE REMAINDER OF THIS PAGE IS FOR ROUGH WORKING ONLY.**