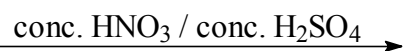
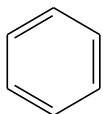
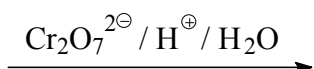
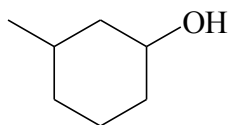


**Marks**  
**4**

- Give the constitutional formula and the name of the major organic product of each of the following reactions.



Name:



Name: