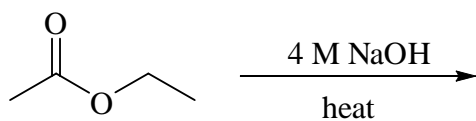
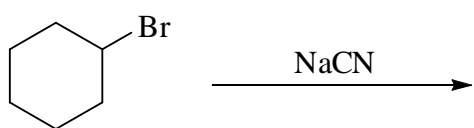
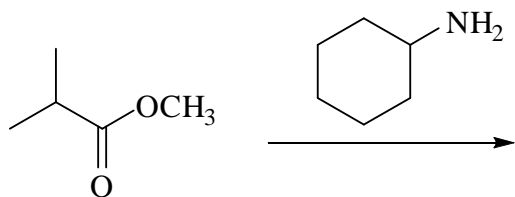


- Give the constitutional formula(s) of the organic products formed in each of the following reactions

Marks
3



THE REMAINDER OF THIS PAGE IS FOR ROUGH WORKING ONLY.