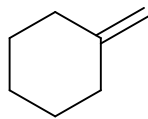
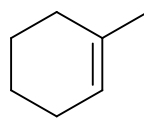



**Marks**  
**4**

- Devise a way to convert alkene **C** to alkene **D** using hydrogen bromide (HBr) as one of the reagents. Provide any other reagents you might need. If any of the steps you use could form two products, explain whether there is any selectivity and why.

**C****D**