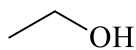
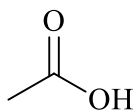
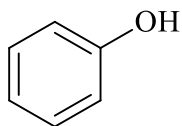


Marks
3

- Consider the three compounds shown below.



Arrange these compounds in order of increasing acidity. Explain your reasoning.