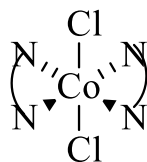
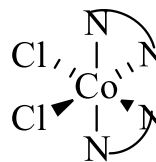
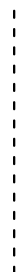
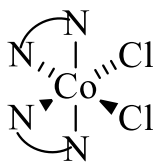


Marks
4

- Name the complex $[\text{CoCl}_2(\text{en})_2]$. en = ethylenediamine = $\text{NH}_2\text{CH}_2\text{CH}_2\text{NH}_2$

dichloridobis(ethylenediamine)cobalt(II)

Draw all possible isomers of this complex.

*trans* isomer*cis* isomers**THE REMAINDER OF THIS PAGE IS FOR ROUGH WORKING ONLY.**