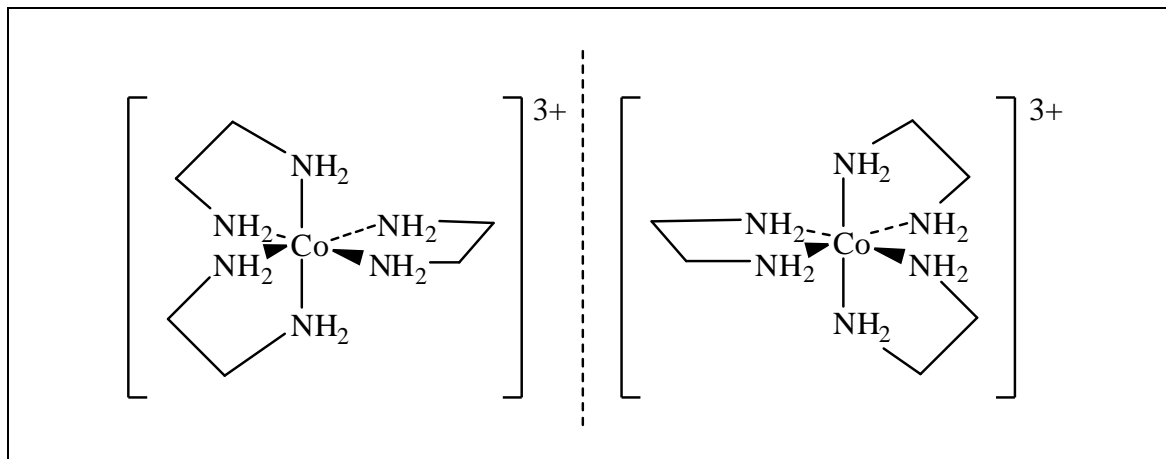


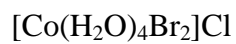
2

- Draw all stereoisomers of the complex ion of $[\text{Co}(\text{en})_3]\text{Br}_3$.
(en = ethylenediamine = $\text{NH}_2\text{CH}_2\text{CH}_2\text{NH}_2$)

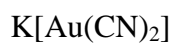


2

- Name the following complexes.



tetraaquadibromidocobalt(III) chloride



potassium dicyanidoaurate(I)