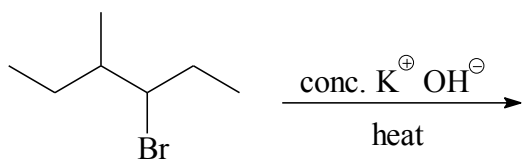
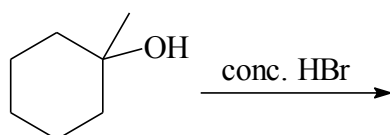
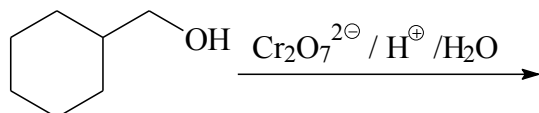


**Marks**  
**6**

- Draw the structure(s) of the major organic product(s) formed in each of the following reactions. Give the names of the products where requested.

**Name(s):****Name(s):**