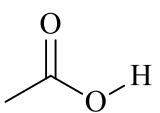
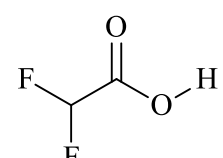
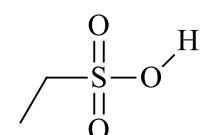
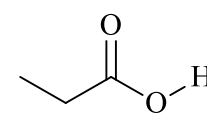


Marks
5

- Draw the conjugate bases for the following acids.

S 	T 	U 	V 
Conjugate base of S	Conjugate base of T	Conjugate base of U	Conjugate base of V

Which of **S** and **T** is the stronger acid? Give a reason for your answer.

Which of **U** and **V** is the stronger acid? Give a reason for your answer.