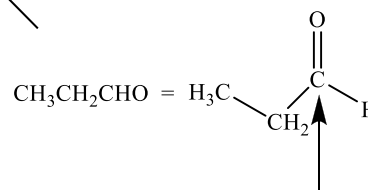
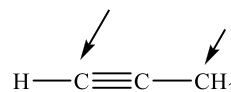
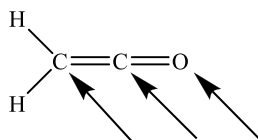
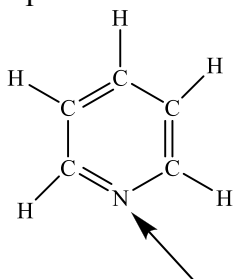


## Work through the ChemCAL module "Molecular Shape and Structure".

1. Give the approximate bond angle at the atoms indicated by arrows in the following compounds.



2. For each of the following molecules or ions,



- Use valence shell electron pair repulsion (VSEPR) theory to draw a diagram showing the arrangement of valence shell electron pairs ( $\sigma$  and, where appropriate  $\pi$ , and non-bonding).
- Describe the shape of the molecule or ion in words.
- Indicate the hybridisation state of the central atom.

3. Complete the following table.  $\text{NH}_3$  is given as an example.

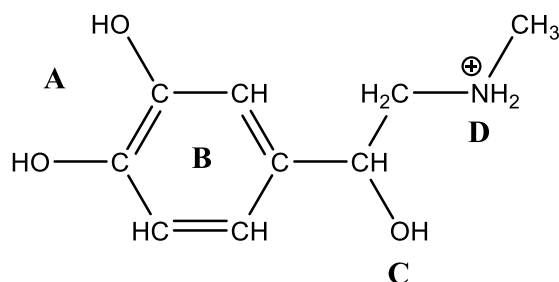
Species	Number of electron pairs around central atom	Number of bonding pairs around central atom	Number of non-bonding pairs around central atom	Geometry of molecule
$\text{NH}_3$	4	3	1	trigonal pyramidal
$\text{SF}_6$				
$\text{ClF}_3$				
$\text{SF}_4$				

4. The dipole moments and boiling points of  $\text{CH}_2\text{F}_2$ ,  $\text{CH}_2\text{Cl}_2$  and  $\text{CH}_2\text{Br}_2$  are listed in the table below.

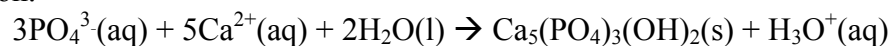
Compound	$\text{CH}_2\text{F}_2$	$\text{CH}_2\text{Cl}_2$	$\text{CH}_2\text{Br}_2$
Dipole moment, $\mu$ (D)	1.93	1.60	1.43
Boiling point ( $^\circ\text{C}$ )	-52	41	99

- What intermolecular forces operate in these compounds?
- Briefly explain why the boiling points increase in this order  $\text{CH}_2\text{F}_2 < \text{CH}_2\text{Cl}_2 < \text{CH}_2\text{Br}_2$ .

5. The structure of the hormone adrenaline is shown below. For each of the areas **A**, **B**, **C** and **D** indicate the types of intermolecular interaction likely to be important in binding the hormone to a receptor.



6. Bones contain the mineral hydroxyapatite,  $\text{Ca}_{10}(\text{PO}_4)_6(\text{OH})_2$ . A synthetic sample of hydroxyapatite was prepared by reacting 0.090 M sodium phosphate solution (200 mL) with a 0.10 M calcium chloride solution (400 mL) according to the following equation.



- (a) What is the maximum amount (in mol) of  $\text{Ca}_{10}(\text{PO}_4)_6(\text{OH})_2$  that can precipitate?
- (b) What is the final concentration of  $\text{Cl}^-(\text{aq})$  ions remaining in solution after the reaction?